

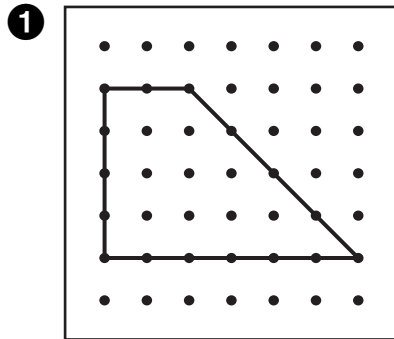
Name _____

Estimate Perimeter and Area



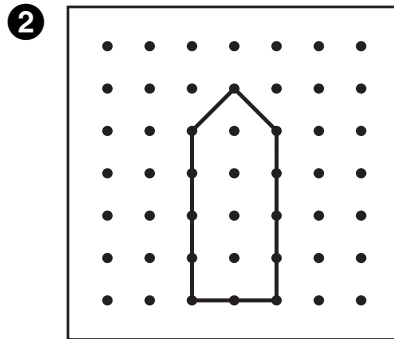
Try This

- Model each shape on your geoboard.
- Estimate the perimeter and area of each shape.



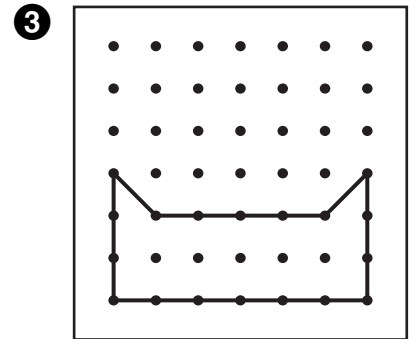
Perimeter: _____

Area: _____



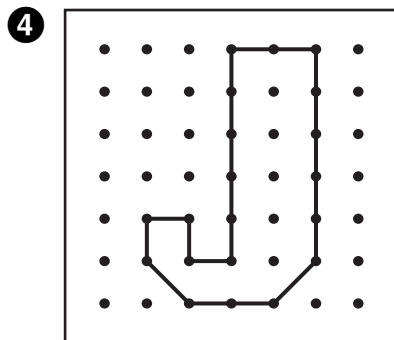
Perimeter: _____

Area: _____



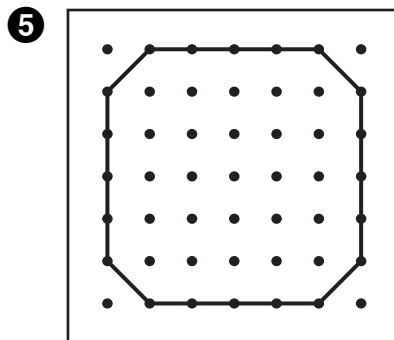
Perimeter: _____

Area: _____



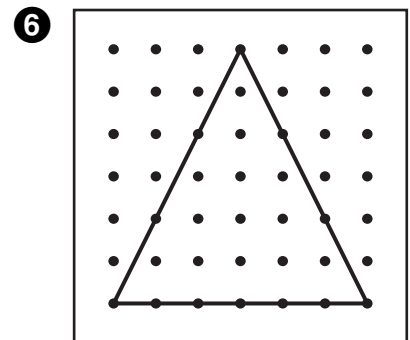
Perimeter: _____

Area: _____



Perimeter: _____

Area: _____



Perimeter: _____

Area: _____

7 How did you find the area of the shape in problem 5?

8 How did you find the area and perimeter of the shape in problem 6?
